

Registration Assignment for Grade 1

This registration assignment must be completed by all students applying for Distributed Learning. When it is completed **attach** the work to the application form and return all to our office.

Parents may help their child to read the instructions. However, students should work independently on the exercises.

Writing: finish the sentences below.

My favorite sport is _____

When I am with friends I like to _____

Fill in the missing letters. You may use small or capital letters.

A ___ C ___ E F G ___ I J K ___ M
N ___ P ___ R S T ___ V W X Y ___

Draw a picture of yourself doing your favorite activity.

My picture:




Math:


- Complete the following questions.

Write the number that shows the correct amount of cats.

There are _____ cats.



There are _____ cats.



What number comes before and after?

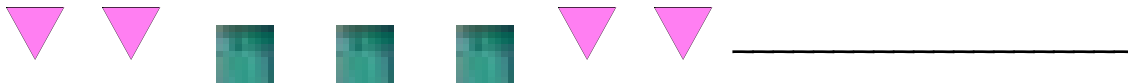
3. _____ 33 _____

4. _____ 45 _____

5. Draw a picture to show:

Triangle	Square
Rectangle	Circle

6. What comes next in the pattern below?



7. Draw pictures to make the amount asked for.

Draw four trees	Draw 9 items
-----------------	--------------